

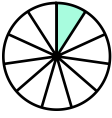
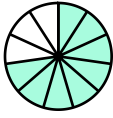

Name : _____

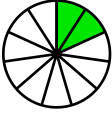
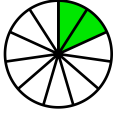
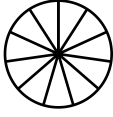
Score : _____



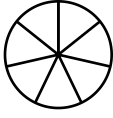
Teacher : _____

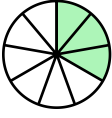
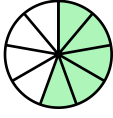
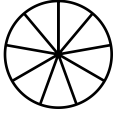
Date : _____

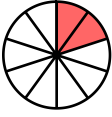
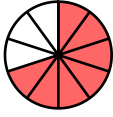
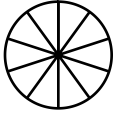
Visually Adding Simple Fractions

1)  +  = 
 $\frac{1}{11} + \frac{8}{11} =$ _____

2)  +  = 
 $\frac{2}{11} + \frac{2}{11} =$ _____

3)  +  = 
 $\frac{2}{7} + \frac{2}{7} =$ _____

4)  +  = 
 $\frac{3}{9} + \frac{5}{9} =$ _____

5)  +  = 
 $\frac{2}{10} + \frac{7}{10} =$ _____

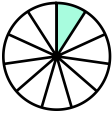
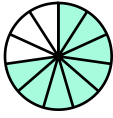
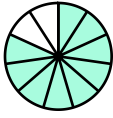
Name : _____

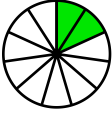
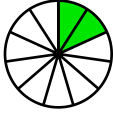
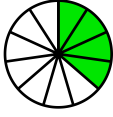
Score : _____




Teacher : _____

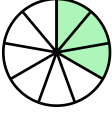
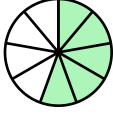
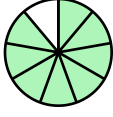
Date : _____

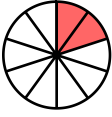
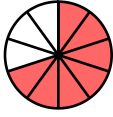
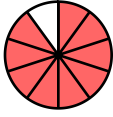
Visually Adding Simple Fractions

1)  +  = 
$$\frac{1}{11} + \frac{8}{11} = \frac{9}{11}$$

2)  +  = 
$$\frac{2}{11} + \frac{2}{11} = \frac{4}{11}$$

3)  +  = 
$$\frac{2}{7} + \frac{2}{7} = \frac{4}{7}$$

4)  +  = 
$$\frac{3}{9} + \frac{5}{9} = \frac{8}{9}$$

5)  +  = 
$$\frac{2}{10} + \frac{7}{10} = \frac{9}{10}$$